


Заменяй картинки на числа и реши примеры!



5



3




1




6




2



7




8



9



4



10



+



=



=



=



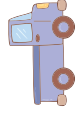
-



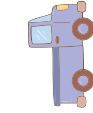
=



=



=



-



=



+



=



+



=



+



=